

सैंट थॉमस स्कूल साहिबाबाद(2020-21)

अभ्यास पत्र-3

कक्षा- तृतीय

विषय – हिंदी

संज्ञा और सर्वनाम

प्र 1. निम्नलिखित अनुच्छेद पढ़कर संज्ञा एवम सर्वनाम शब्दों को छांटकर लिखिए।

यह मेरा प्यारा घर है। मैं मां, पिताजी और दीदी के साथ अपने घर में रहता हूँ। इसमें चार कमरे हैं। घर के पीछे एक छोटा सा बगीचा है। मेरा घर साफ सुथरा रहता है। आप सभी लोग घर पर ही रहें और स्वस्थ रहें। घर में ही रहकर हम सभी कोरोना को भगा सकते हैं। जय हिन्द।

प्र 2. अपनी पसंद की कोई एक कविता लिखिए जो आपने कक्षा द्वितीय में पढ़ाई की है।

प्र 3 . संज्ञा और सर्वनाम की परिभाषा उदाहरण सहित लिखिए।

(नोट: यह कार्य एक पतली कॉपी में दिनांक के अनुसार करें।)

ST. THOMAS SCHOOL, SAHIBABAD

Class - III

Subject-EVS

Worksheet – 2 (2020-2021)

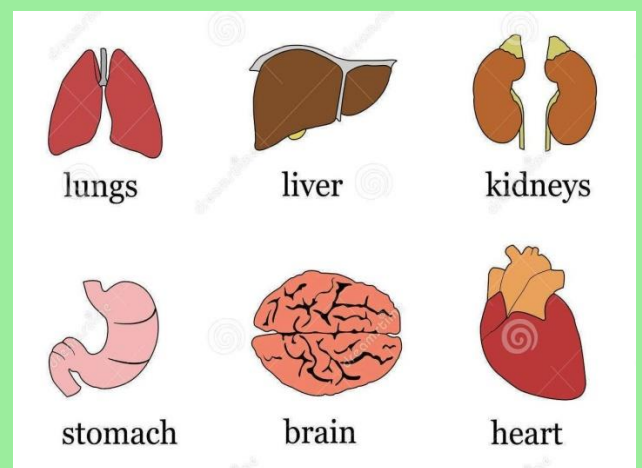
TOPIC – My Body

Date : 06/04/2020

Dear students,

As we know that our body is made up of many parts. Broadly we call them internal body parts and external body parts.

External body parts can be seen while internal body parts cannot be seen.



External Body Parts

Internal Body Parts

Torso, head, neck, arms and legs are called external body parts. Bones, muscles, heart, lungs, kidneys etc are called internal body parts.

Bones are the hardest part of our body.

Muscles are layers of flesh.

A. Fill in the blanks:

- 1) The parts of our body which can be seen are called _____.
- 2) _____ is the hardest part of our body.
- 3) The parts of our body which cannot be seen are called _____.
- 4) _____ are layers of flesh.

B. Name any 5 internal body parts.

C. Name any 5 external body parts.

St. Thomas School, Sahibabad
Computer Worksheet -2(2020-21)
Class -3

Q.1 Fill in the blanks.

- a. A computer is a _____ .
- b. A mouse has _____ buttons.
- c. A keyboard is an _____ device.
- d. We can draw beautiful pictures in _____.
- e. Spacebar is the _____ key in keyboard .

f. Q.2 Write True or False.

(a) A computer is living things. _____.

(b) we can draw pictures in computer. _____

(c) A mouse is an input device. _____.

(d) A computer has four parts. _____

(e) A monitor is an processing device. _____

Q.3 Draw a keyboard and label all the keys.

Note- Do the worksheets in a separate notebook.

Nouns Practice

A noun is a person, place, or thing. There are many types of words printed in the sky area of this picture. Find the nouns and write them in each step to get from the bottom to the top of the road!

road

now

inside

when

say

rock

cloud

saw

over

away

rabbit


flower

Pronouns

C Look at the picture. Write a sentence using a pronoun to answer each question about the picture.

Questions

1. What is the boy doing?
2. What is the girl doing?
3. Where is the monkey?
4. What is the colour of the sky?
5. What are the old man and the old woman doing?
6. What are the birds doing?



Answers

1. He is
2.
3.
4.
5.
6.

ST. THOMAS SCHOOL, SAHIBABAD

Worksheet-3 (2020-21)

Mathematics

Class- III

TOPIC- REVISION OF CH-FUN WITH NUMBERS

1. Fill in the box.

Numbers in figures	Numbers in words	Number in figures	Numbers in words
196			Six thousand three hundred two
	Two hundred five	4089	
799			Seven hundred six
468		9888	
	Six hundred eighty	1010	
1000			Nine thousand ninety nine
	Eighty six	791	
	One thousand twenty five	5055	

2. How many runs do these players need to complete a century?

	<i>Runs scored</i>	<i>Runs needed to complete a century</i>
Player 1	93	_____
Player 2	97	_____
Player 3	89	_____
Player 4	99	_____

3. Count in 10's and fill in the blanks.

10	110	310	_____
20	_____	_____	720
30	_____	_____	_____
_____	_____	_____	_____
_____	_____	_____	_____
_____	_____	_____	_____
_____	_____	_____	780
_____	190	_____	_____
100	200	400	_____

4. Counting in 50's and fill in the blanks.

200	550
250	_____
_____	650
350	_____
_____	750
_____	_____
500	850

5. Jump 2 steps forward:

104, 106, 108, _____, _____, _____, _____.

Jump 2 steps backward:

262, 260, 258, _____, _____, _____, _____.

Jump 10 steps forward:

110, 120, 130, _____, _____, _____, _____.

Jump 10 steps backward:

200, 190, 180, _____, _____, _____, _____.

Continue the pattern:












550, 560, 570, _____, _____, _____, _____.

910, 920, 930, 940, _____, _____, _____, _____.

209, 207, 205, _____, _____, _____, _____.

401, 402, 403, _____, _____, _____, _____.

6. Find out how many packets of tens, hundreds and loose items each animal will take. Fill in the blanks.

		Packets of 100	Packets of 10	Loose items
  143				
  210	_____	_____	_____	
  242	_____	_____	_____	
  552	_____	_____	_____	

7. Who am I? Match with the number.

- | | |
|--|-----|
| a) I come between 40 and 50 and there is a 5 in my name. | 96 |
| b) I have 9 in my name and am very close to 90. | 150 |
| c) If you hit a 4 after me, you score a century. | 45 |
| d) I am equal to ten notes of 10. | 89 |
| e) I am century + half century | 87 |
| f) I am exactly in between 77 and 97. | 100 |

8. How many are these?

_____ rupees

_____ sticks

_____ blocks

_____ beads

_____ rupees

NOTE: Do the worksheet in separate notebook (it should be covered in purple and labelled neatly) or in A4 sheet.